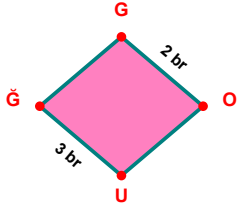
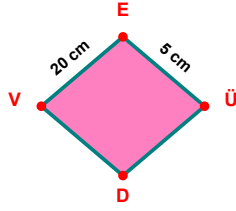


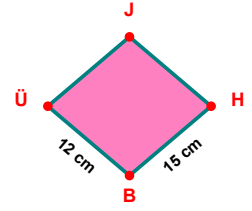
SORU: Aşağıdaki şekillerde verilen, kenar uzunlukları farklarını bulunuz.



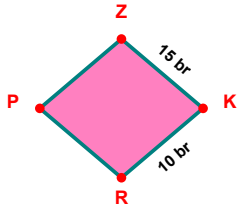
$$|ÜĞ| - |GÖ| = \dots\dots\dots$$



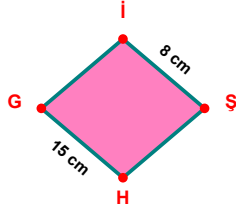
$$|VE| - |EÜ| = \dots\dots\dots$$



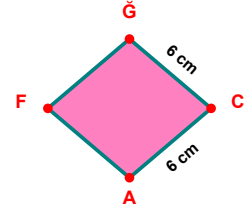
$$|HB| - |BÜ| = \dots\dots\dots$$



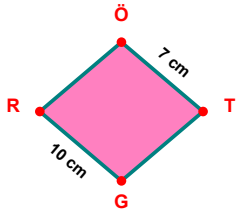
$$|ZK| - |KR| = \dots\dots\dots$$



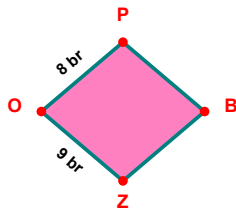
$$|İG| - |İŞ| = \dots\dots\dots$$



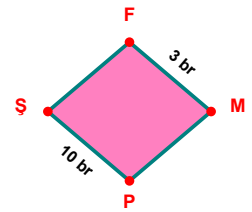
$$|CA| - |ĞC| = \dots\dots\dots$$



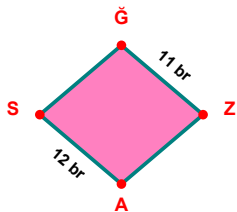
$$|GR| - |ÖT| = \dots\dots\dots$$



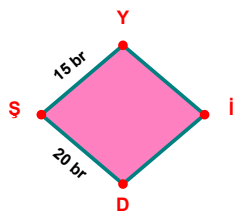
$$|ZO| - |OP| = \dots\dots\dots$$



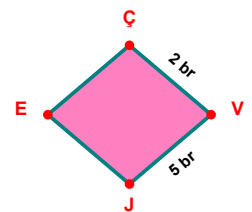
$$|PŞ| - |FM| = \dots\dots\dots$$



$$|AS| - |ĞZ| = \dots\dots\dots$$

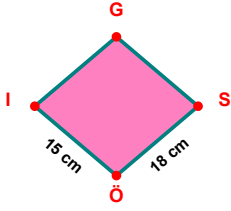


$$|DŞ| - |ŞY| = \dots\dots\dots$$

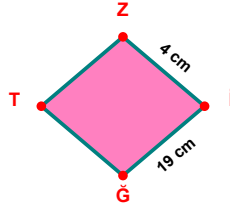


$$|VJ| - |ÇV| = \dots\dots\dots$$

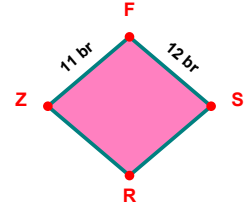
SORU: Aşağıdaki şekillerde verilen, kenar uzunlukları farklarını bulunuz.



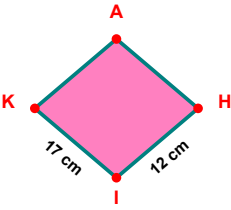
$$|SÖ| - |Öİ| = \dots\dots$$



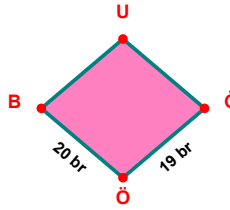
$$|İĞ| - |Zİ| = \dots\dots$$



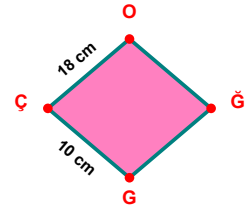
$$|FS| - |ZF| = \dots\dots$$



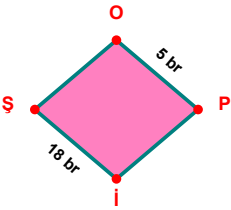
$$|İK| - |HI| = \dots\dots$$



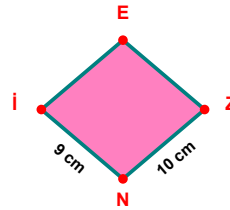
$$|ÖB| - |ĞÖ| = \dots\dots$$



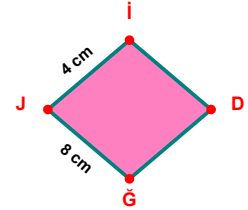
$$|ÇO| - |ĞÇ| = \dots\dots$$



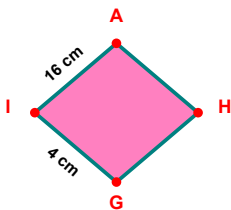
$$|İŞ| - |OP| = \dots\dots$$



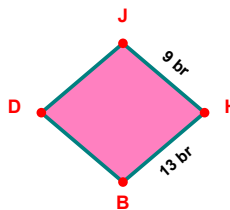
$$|ZN| - |NI| = \dots\dots$$



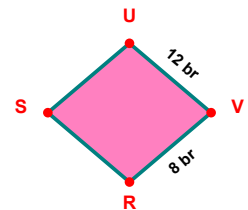
$$|ĞJ| - |Jİ| = \dots\dots$$



$$|IA| - |GI| = \dots\dots$$



$$|HB| - |JH| = \dots\dots$$



$$|UV| - |VR| = \dots\dots$$

SÜREÇ ODAKLI DEĞERLENDİRME ÖLÇEĞİ

Doğru Sayısı: / 24

Öğretmen ilgili kutucuğu işaretler.

Geliştirilmeli (0-8)

İyi (9-14)

Çok İyi (15-20)

Mükemmel (21-24)

☐☐☐☐

Hazırlayan:

Bu bölüme sınıfınızın ilgili kazanıma yönelik genel durumuna ilişkin gözlem ve izlenimlerinizi, öğrencilerinizin bu kazanımla ilgili öğrenme eksikliklerini ve bu eksikliklerin giderilmesi amacıyla yaptığınız/yapmayı planladığınız faaliyetleri not edebilirsiniz.

No	Adı - Soyadı	Toplam Puan	Değerlendirme
1			
2			
3			
4			
5			
6			
7			
8			
9			
10			
11			
12			
13			
14			
15			
16			
17			
18			
19			
20			
21			
22			
23			
24			
25			
26			
27			
28			
29			
30			
31			
32			
33			
34			
35			

Hazırlayan: